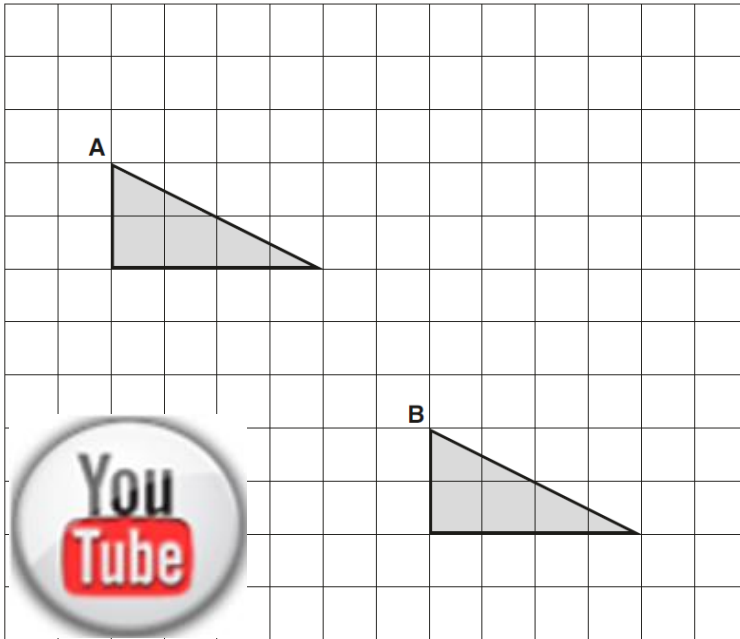




Help Code : 042

# “TRANSLATE”

12 A triangle is translated from position A to position B.



Complete the sentence.

The triangle has moved  squares to the right  
and  squares down.

you are using the **2017 Edition**

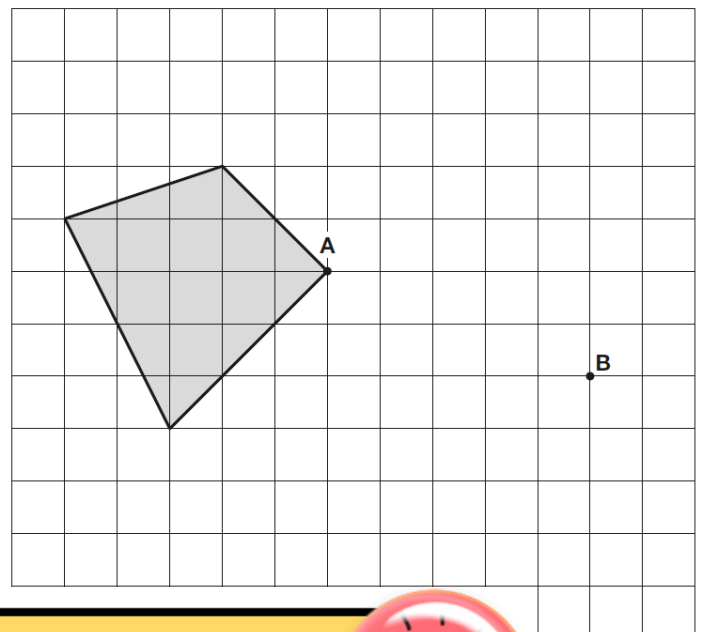
**TIME TO UPDATE**  
**CLICK HERE** to 2019

8



Here is a shaded shape on a grid  
The shape is translated so that point **A** moves to point **B**.  
Draw the shape in its new position.

Use a ruler.



**2019 Organiser** Out Now... All-New **Arithmetic Ninjas, Paired Domino Activities, Self-Marking Papers, One Page Wonders** and new Tutorial videos for last Summer's **SATs**. Try it free [press here!](#)



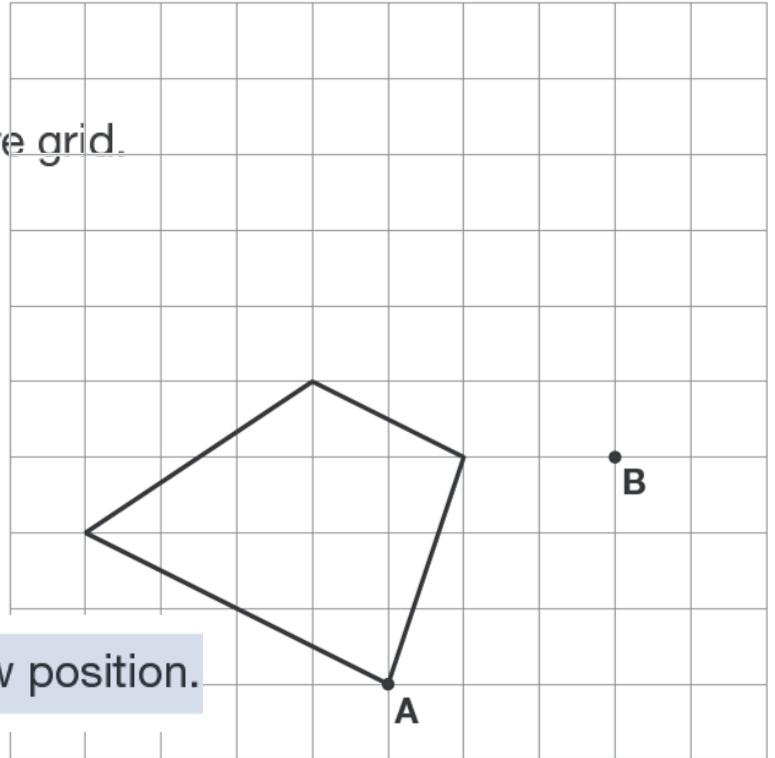
# Y6 SATs

# TRANSLATING SHAPES BOOSTER

2010A KS2 Q24

Here is a quadrilateral on a square grid.

The quadrilateral is translated so that point **A** moves to point **B**.

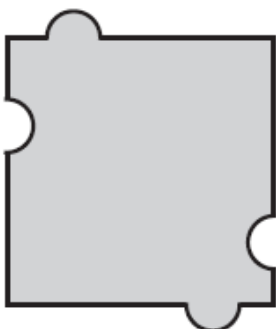
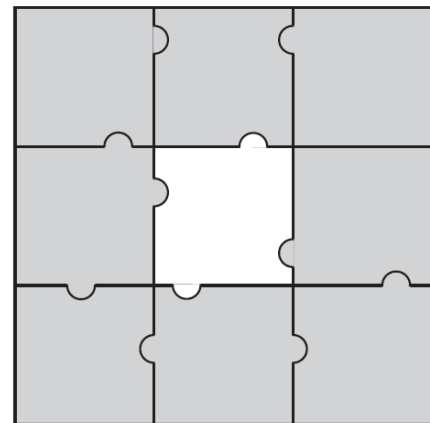


Draw the quadrilateral in its new position.


2000A KS2 Q3

Here is a jigsaw with one piece **missing**.

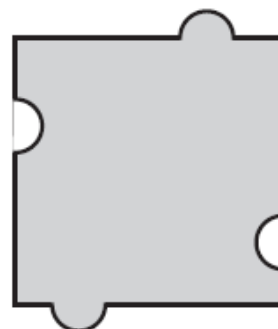
Which **one** of the pieces below fits the hole in the middle?



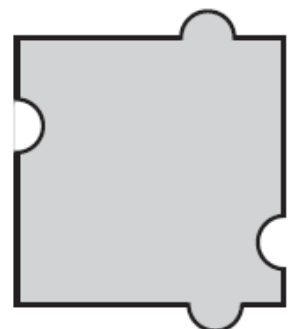
A



B



C



D